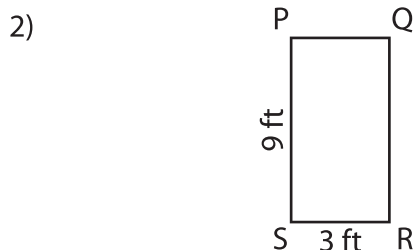
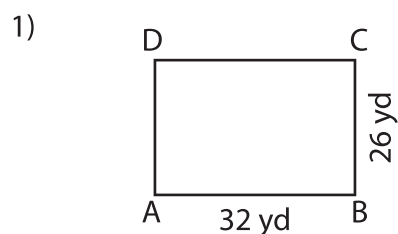


Name : _____

Sides of a Rectangle

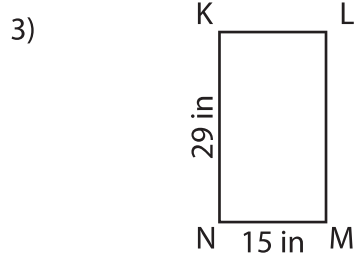
Sheet 1

Find the length of the remaining sides of each rectangle.



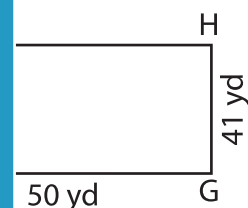
CD = _____ ;

_____ ; QR = _____



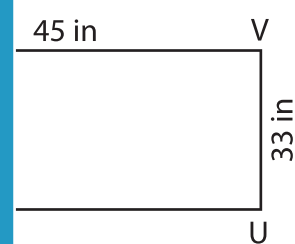
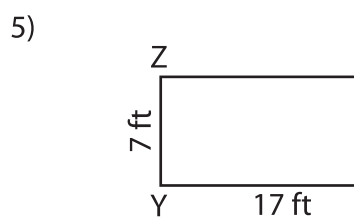
PREVIEW

Gain complete access to the largest collection of worksheets in all subjects!



LM = _____ ;

_____ ; EH = _____



WX = _____ ; WZ = _____

TU = _____ ; TW = _____

7) The lengths of \overline{RS} and \overline{ST} of a rectangle RSTU are 7 yards and 5 yards respectively. Find TU and RU.

