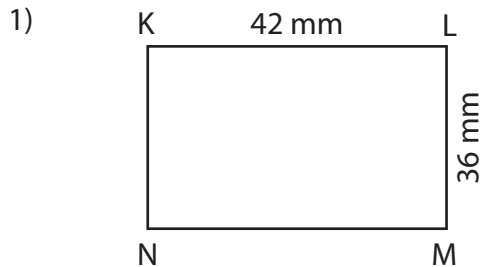


Name : _____

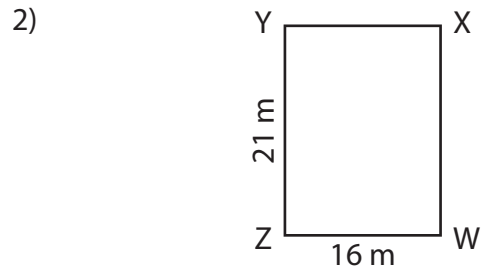
Sides of a Rectangle

Sheet 3

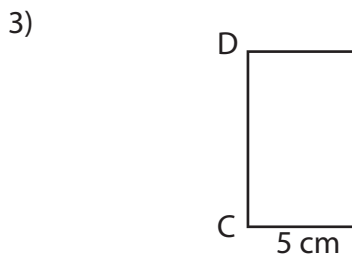
Find the length of the remaining sides of each rectangle.



MN = _____ ;



_____ ; XY = _____



CD = _____ ;

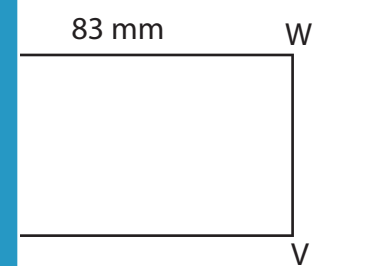
PREVIEW

Gain complete access to the largest collection of worksheets in all subjects!

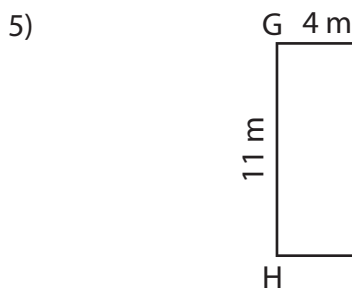
Members, please log in to download this worksheet.

Not a member? Please sign up to gain complete access.

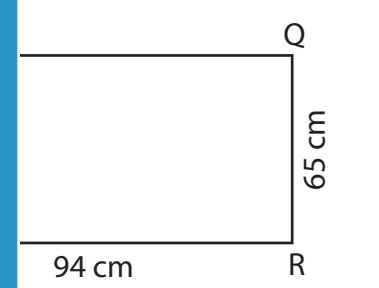
www.mathworksheets4kids.com



_____ ; UV = _____



EF = _____ ; EH = _____



PS = _____ ; PQ = _____

7) The lengths of \overline{VW} and \overline{VY} of a rectangle VWXY are 68 m and 81 m respectively. Determine XY and WX.

