

Name : _____

Quadrilaterals






Observe the quadrilateral flowchart. Identify the type of quadrilateral . Cut and glue the appropriate labels.



Name : _____

Quadrilaterals



| | | |
|--|---|--|
|  Kite |  |  ombus |
|  Squa | |  zoid(U.S.) zium(UK) |

PREVIEW

Gain complete access to the largest collection of worksheets in all subjects!

Members, please log in to download this worksheet.

Not a member? Please sign up to gain complete access.

www.mathworksheets4kids.com