

Name : _____

Quadrilaterals

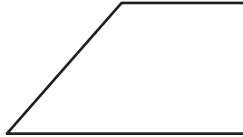
L2S1

Identify each quadrilateral.

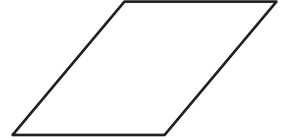
1)



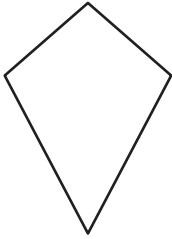
2)




3)



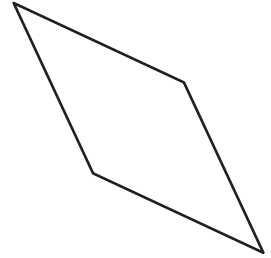
4)



5)



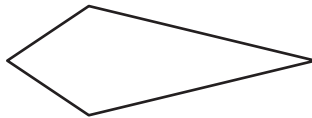
6)




7)



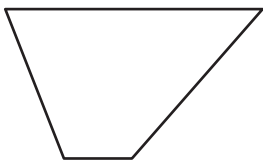
8)



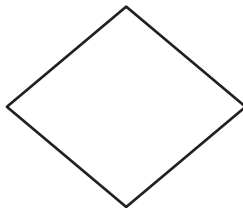
9)



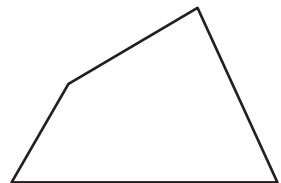
10)



11)



12)



Name : _____

Answer key

Quadrilaterals

L2S1

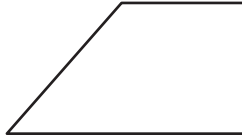
Identify each quadrilateral.

1)



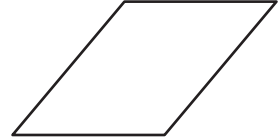
Rectangle

2)



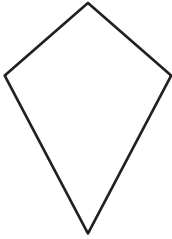
Trapezoid

3)




Parallelogram

4)



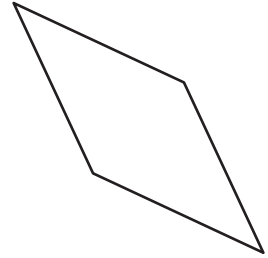
Kite

5)



Square

6)



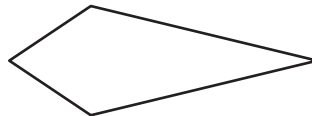
Rhombus

7)




Parallelogram

8)



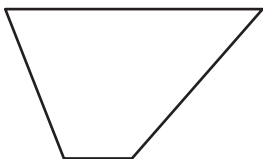
Kite

9)



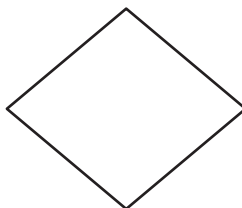
Rectangle

10)



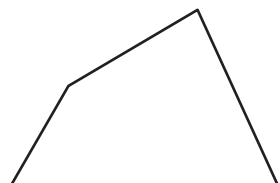
Trapezoid

11)



Rhombus

12)



Quadrilateral