

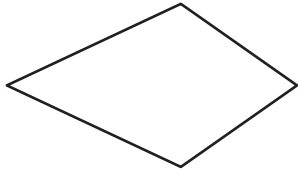
Name : _____

Quadrilaterals

L2S2

Identify each quadrilateral.

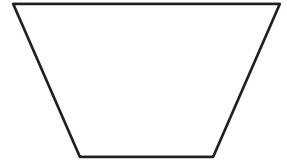
1)



2)



3)



4)



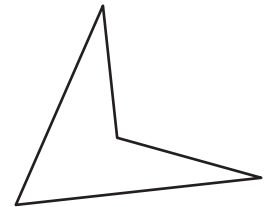
PREVIEW

Gain complete access to the largest collection of worksheets in all subjects!

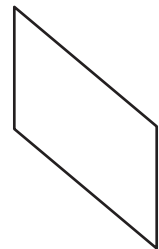
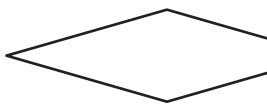
Members, please log in to download this worksheet.

Not a member? Please sign up to gain complete access.

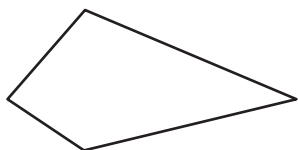
www.mathworksheets4kids.com



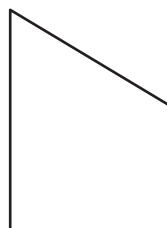
7)



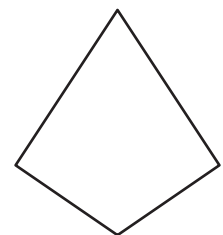
10)



11)



12)



Name : _____

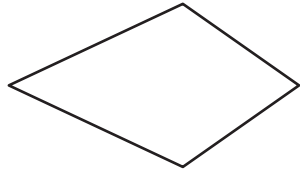
Answer key

Quadrilaterals

L2S2

Identify each quadrilateral.

1)



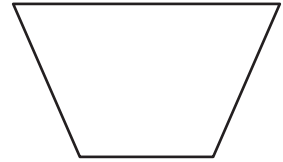
Kite

2)



Square

3)



Trapezoid

4)



Parallelogram

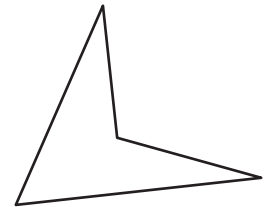
PREVIEW

Gain complete access to the largest collection of worksheets in all subjects!

Members, please log in to download this worksheet.

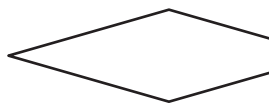
Not a member? Please sign up to gain complete access.

www.mathworksheets4kids.com

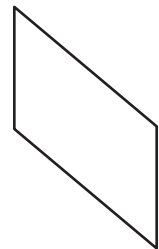


Quadrilateral

7)

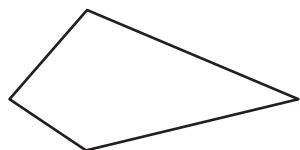


Rhombus



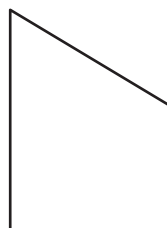
Parallelogram

10)



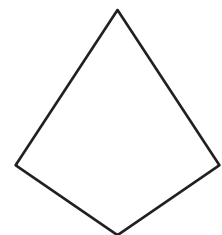
Quadrilateral

11)



Trapezoid

12)



Kite