

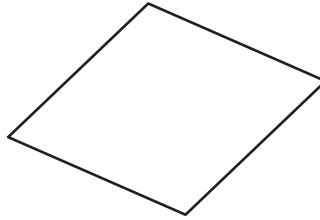
Rhombus

State whether each quadrilateral is a rhombus.

1)



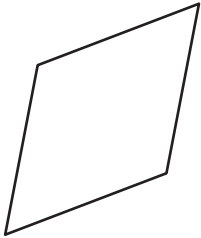
2)



3)



4)



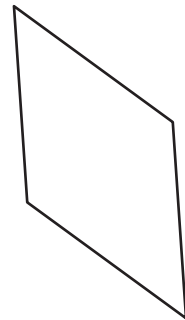
PREVIEW

Gain complete access to the largest collection of worksheets in all subjects!


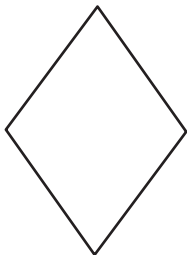
Members, please log in to download this worksheet.

Not a member? Please sign up to gain complete access.

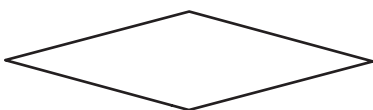
www.mathworksheets4kids.com



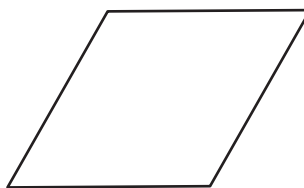
7)



10)



11)



12)

