

Name : _____

Converting from 12-Hour to 24-Hour Clocks

A) Convert each time from 12-hour to 24-hour clock.

1) 7:12 a.m. = _____

2) 10:05 p.m. = _____

3) 2:43 p.m. = _____

4) 5:31 a.m. = _____

5) 9:24 a.m. = _____




6) 11:56 p.m. = _____

7) 6:39 p.m. = _____

8) 3:00 a.m. = _____

B) Read each analog

format.



C) The flight to Dallas will depart at 03:45 pm. Express this time in a 24-hour clock format.

PREVIEW

Gain complete access to the largest collection of worksheets in all subjects!

Members, please log in to download this worksheet.

Not a member? Please sign up to gain complete access.

www.mathworksheets4kids.com