

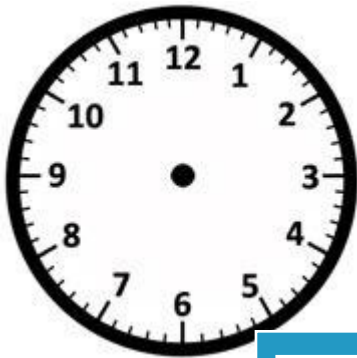
Name: _____

Drawing Hands - Minutes

Sheet 1

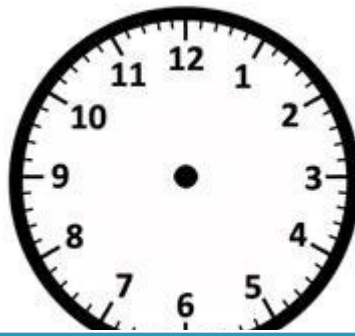
Draw hands on each clock for the time given below:

1)




Time: 3:49

2)



6:30

3)



4)




Time: 7:15

Gain complete access to the largest collection of worksheets in all subjects!

Members, please log in to download this worksheet.


Not a member? Please sign up to gain complete access.

www.mathworksheets4kids.com



4:28

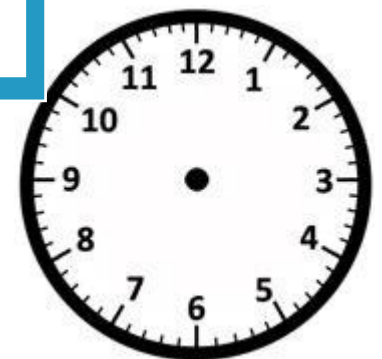
7)



Time: 2:22



Time: 8:56



Time: 1:01