

Drawing Hands - Minutes

Draw hands on each clock for the time given below:

1)



Time: 5:59

2)



11:11

3)



4)




Time: 10:15

Gain complete access to the largest collection of worksheets in all subjects!

Members, please log in to download this worksheet.

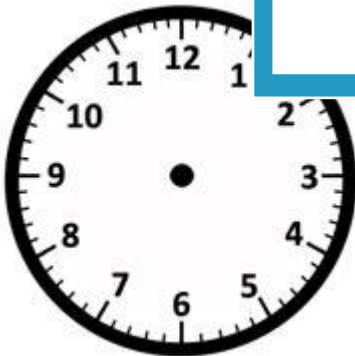
Not a member? Please sign up to gain complete access.

www.mathworksheets4kids.com



6:36


7)



Time: 2:38



Time: 4:42



Time: 8:30