

Name : \_\_\_\_\_

# Telling Time


1 Minute: S1

A) Read each clock, and write the time.

1)



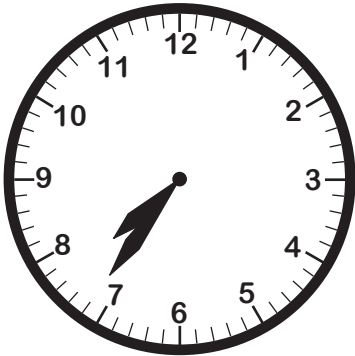
2)



3)




4)



5)




6)



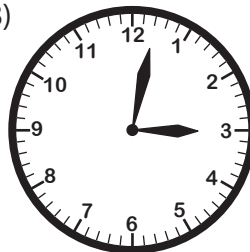
B) Choose the clock that shows the given time.

Time : 3:02

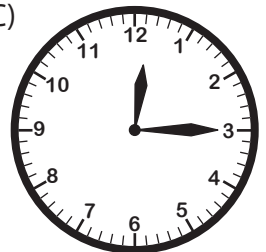
A)



B)



C)



C) Choose the correct time shown by the clock.



A)

**5:59**

B)

**6:58**

C)

**11:30**

Name : \_\_\_\_\_

**Telling Time**

1 Minute: S1


A) Read each clock, and write the time.

1)




**2:57**

2)




**8:24**

3)



**9:45**

4)




**7:36**

5)



**10:10**

6)

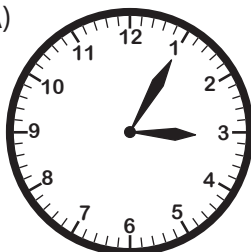


**4:08**

B) Choose the clock that shows the given time.

Time : 3:02

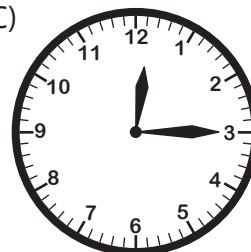
A)




**B)** ✓



C)



C) Choose the correct time shown by the clock.



**A)** ✓

**5:59**

B)

**6:58**

C)

**11:30**