


Name : _____

Telling Time


1 Minute: S2

A) Read each clock, and write the time.

1)





2)



3)



4)




B) Choose the clock

Time : 10:23



C)



C) Choose the correct time shown by the clock.



A)

9:13

B)

9:45

C)

9:14

PREVIEW

Gain complete access to the largest collection of worksheets in all subjects!

Members, please log in to download this worksheet.

Not a member? Please sign up to gain complete access.

www.mathworksheets4kids.com


Name : _____

Telling Time

1 Minute: S2

A) Read each clock, and write the time.

1)




1:42

2)




3)




12:53

4)



11:28



6:30

PREVIEW

Gain complete access to the largest collection of worksheets in all subjects!

Members, please log in to download this worksheet.

Not a member? Please sign up to gain complete access.


www.mathworksheets4kids.com

B) Choose the clock

Time : 10:23



C) Choose the correct time shown by the clock.



A)

9:13

B)

9:45

9:14