


Name : _____

Telling Time

1 Minute: S3

A) Read each clock, and write the time.

1)




2)



3)



4)

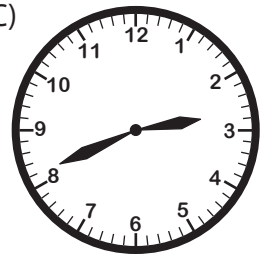


B) Choose the clock

Time : 2:38



C)



C) Choose the correct time shown by the clock.



A)

9:59

B)

11:47

C)

10:47

PREVIEW

Gain complete access to the largest collection of worksheets in all subjects!

Members, please log in to download this worksheet.

Not a member? Please sign up to gain complete access.

www.mathworksheets4kids.com


Name : _____

Telling Time

1 Minute: S3

A) Read each clock, and write the time.

1)




4:01

2)




7:58

3)




6:12

4)





12:09



8:34

B) Choose the clock

Time : 2:38

PREVIEW


Gain complete access to the largest collection of worksheets in all subjects!

Members, please log in to download this worksheet.

Not a member? Please sign up to gain complete access.

www.mathworksheets4kids.com

C)



C) Choose the correct time shown by the clock.



A)

9:59

B) ✓

11:47

C)

10:47