

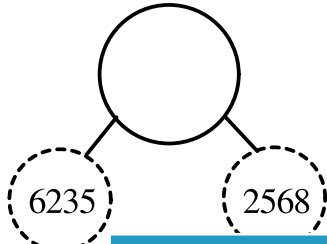
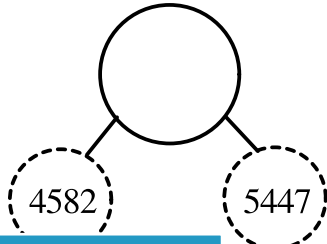




Student Name: \_\_\_\_\_

Score: \_\_\_\_\_

**Missing Number Bond**

4-digit: E

Use addition or subtraction to find the missing numbers:

1) 	2) 
3) 	<p><b>PREVIEW</b></p> <p>Gain complete access to the largest collection of worksheets in all subjects!</p> <p>Members, please log in to download this worksheet.</p> <p>Not a member? Please sign up to gain complete access.</p> <p><a href="http://www.mathworksheets4kids.com">www.mathworksheets4kids.com</a></p>
5) 	
7) 	10) 