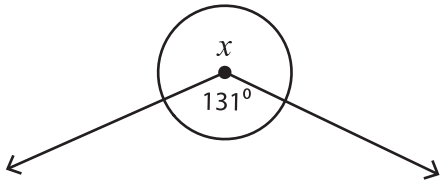


Name : _____

Angles Around a Point

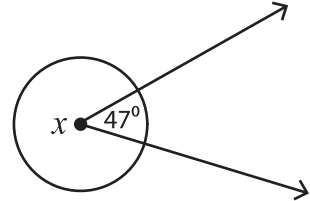
Find the size of each missing angle.

1)



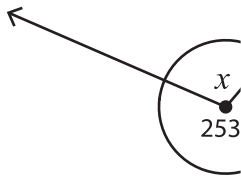
$x =$ _____

2)

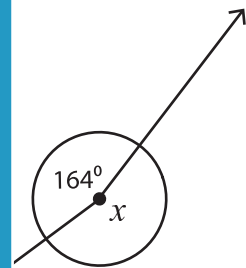


$x =$ _____

3)

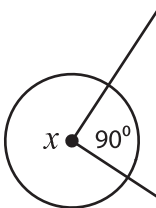


$x =$ _____




$x =$ _____

5)



$x =$ _____



$x =$ _____

PREVIEW

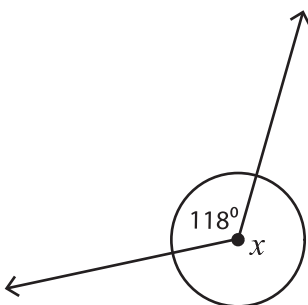
Gain complete access to the largest collection of worksheets in all subjects!

Members, please log in to download this worksheet.

Not a member? Please sign up to gain complete access.

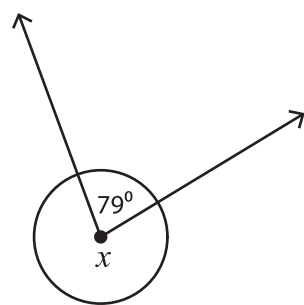
www.mathworksheets4kids.com

7)



$x =$ _____

8)



$x =$ _____