

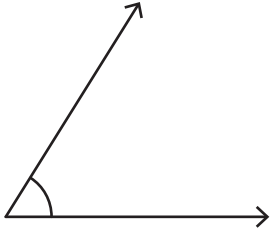
Name : _____

Identifying the Types of Angles

T1S1

Identify each angle as acute, right, obtuse, straight, or reflex.

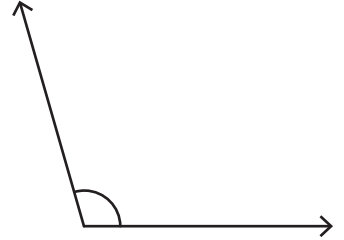
1)



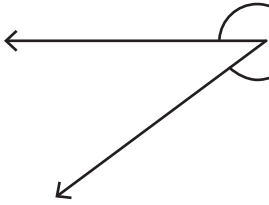
2)



3)



4)



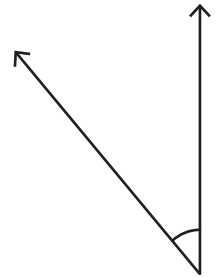
PREVIEW

Gain complete access to the largest
collection of worksheets in all subjects!


Members, please
log in to
download this
worksheet.

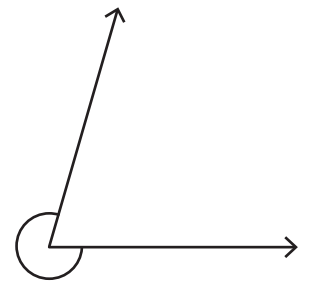
Not a member?
Please sign up to
gain complete
access.

www.mathworksheets4kids.com



7)

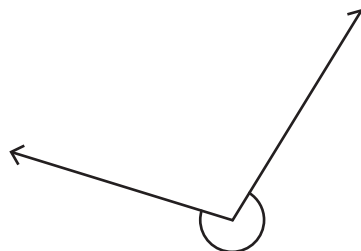




10)



11)



12)

