

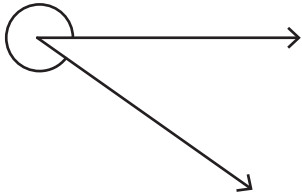
Name : _____

Identifying the Types of Angles

T1S4

Identify each angle as acute, right, obtuse, straight, or reflex.

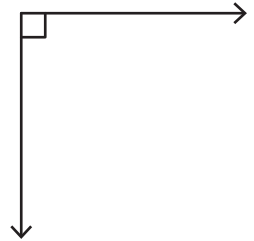
1)



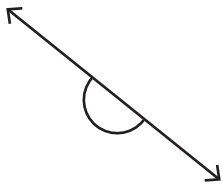
2)



3)

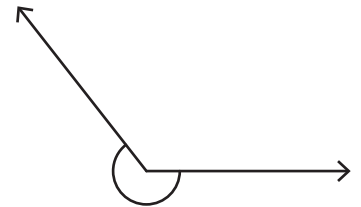


4)

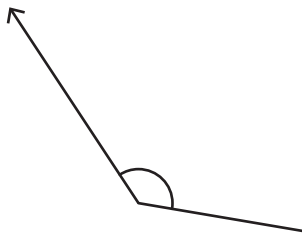


PREVIEW

Gain complete access to the largest collection of worksheets in all subjects!



7)



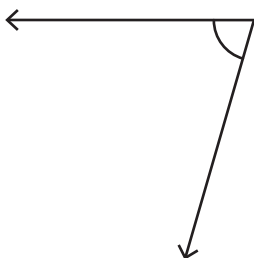
Members, please log in to download this worksheet.

Not a member? Please sign up to gain complete access.

www.mathworksheets4kids.com



10)



11)



12)

