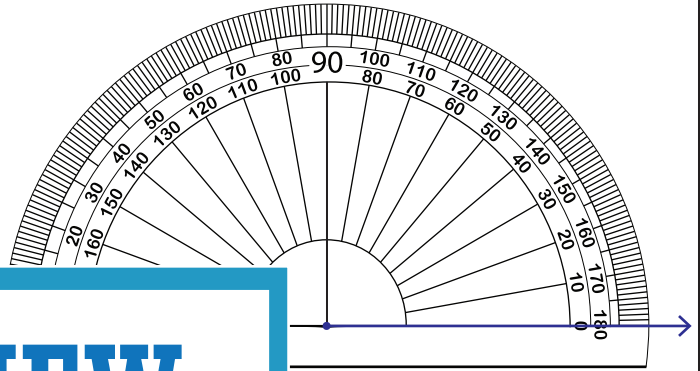
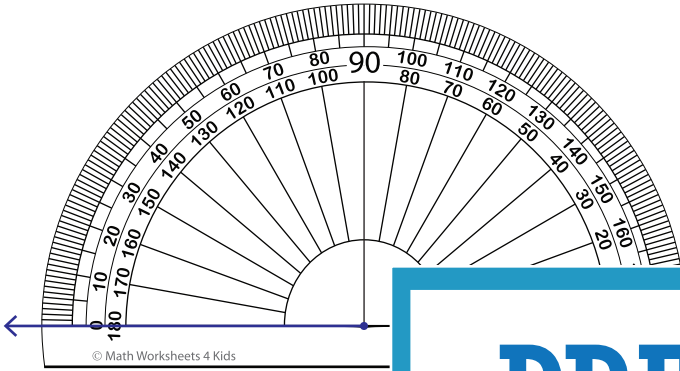


# Drawing Angles

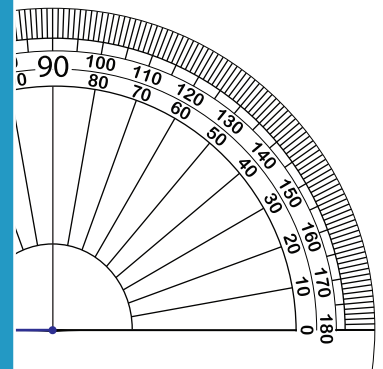
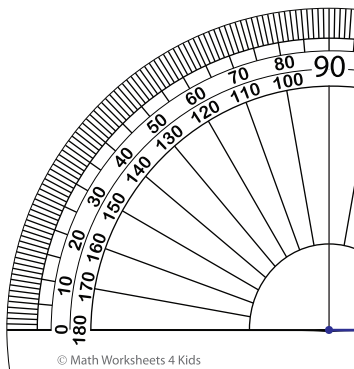
Draw each angle using a protractor.

1)  $166^\circ$

2)  $75^\circ$



3)  $40^\circ$



**PREVIEW**

Gain complete access to the largest collection of worksheets in all subjects!

Members, please log in to download this worksheet.

Not a member? Please sign up to gain complete access.

[www.mathworksheets4kids.com](http://www.mathworksheets4kids.com)

5)  $135^\circ$

