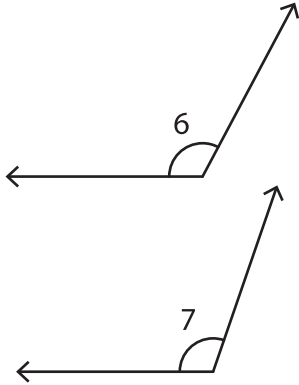


Estimate, Measure, and Compare

1)



Compare and estimate which is the smaller angle. _____

Exact measure of $\angle 6$	Exact measure of $\angle 7$	Was your estimation correct?

2)

Compare and estimate

Exact measure of $\angle 2$

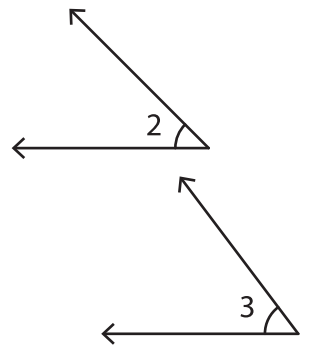
PREVIEW

Gain complete access to the largest collection of worksheets in all subjects!

Members, please log in to download this worksheet.

Not a member? Please sign up to gain complete access.

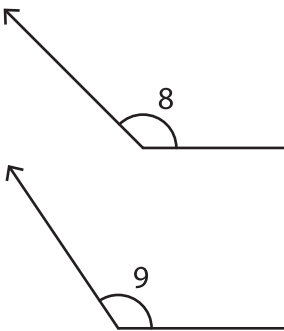
www.mathworksheets4kids.com



Compare and estimate which is the smaller angle. _____

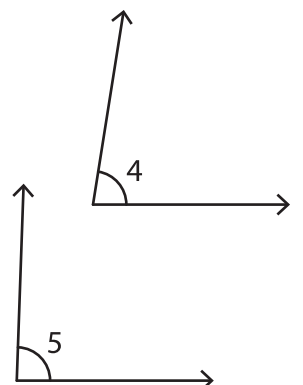
Exact measure of $\angle 2$	Exact measure of $\angle 3$	Was your estimation correct?

3)



Compare and estimate which is the larger angle. _____

Exact measure of $\angle 8$	Exact measure of $\angle 9$	Was your estimation correct?



4)