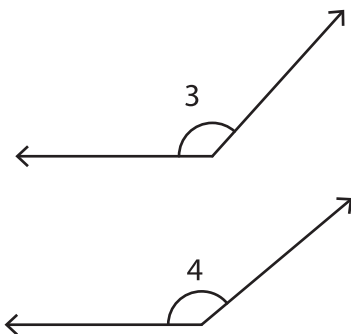


Estimate, Measure, and Compare

1)

Compare and estimate which is the smaller angle. _____



Exact measure of $\angle 3$	Exact measure of $\angle 4$	Was your estimation correct?

2)

Compare and estimate

Exact measure of $\angle 1$

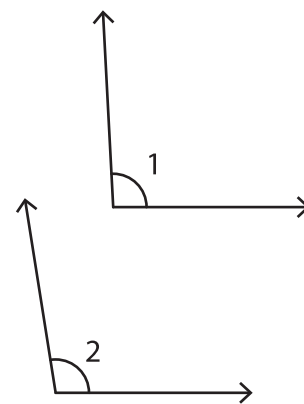
PREVIEW

Gain complete access to the largest collection of worksheets in all subjects!

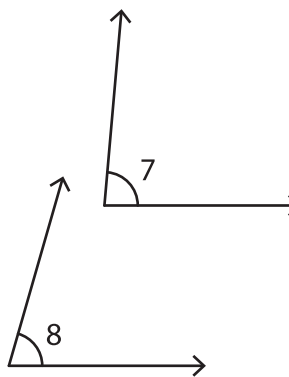
Members, please log in to download this worksheet.

Not a member? Please sign up to gain complete access.

www.mathworksheets4kids.com



3)



Compare and estimate which is the larger angle. _____

Exact measure of $\angle 7$	Exact measure of $\angle 8$	Was your estimation correct?

4)

Compare and estimate which is the larger angle. _____

Exact measure of $\angle 5$	Exact measure of $\angle 6$	Was your estimation correct?

