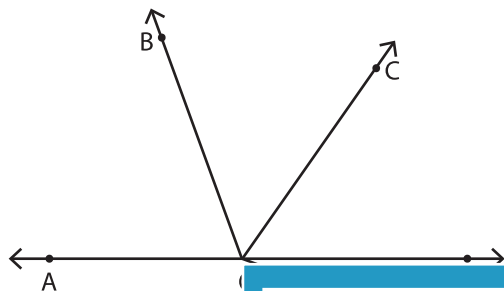


Name : _____

Angles on a Straight Line

Find the measure of the specified angles.

1)

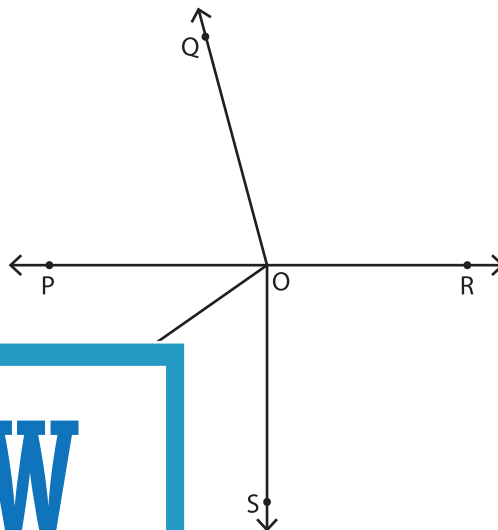


$m\angle DOE = 20^\circ$

$m\angle AOC = 125^\circ$

$m\angle BOC = 55^\circ$

2)

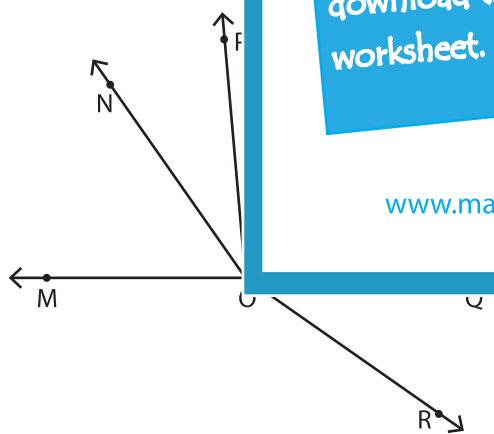


$m\angle TOP = \underline{\hspace{2cm}}$

$m\angle POS = \underline{\hspace{2cm}}$

$m\angle QOT = \underline{\hspace{2cm}}$

3)



$m\angle MON = 55^\circ$

$m\angle MOP = \underline{\hspace{2cm}}$

$m\angle ROM = 145^\circ$

$m\angle NOP = \underline{\hspace{2cm}}$

$m\angle POQ = 95^\circ$

$m\angle QOR = \underline{\hspace{2cm}}$

$m\angle DOE = 115^\circ$

$m\angle BOD = \underline{\hspace{2cm}}$

$m\angle AOB = 60^\circ$

$m\angle EOC = \underline{\hspace{2cm}}$

$m\angle BOC = 75^\circ$

$m\angle AOC = \underline{\hspace{2cm}}$

PREVIEW

Gain complete access to the largest collection of worksheets in all subjects!

Members, please log in to download this worksheet.

Not a member? Please sign up to gain complete access.

www.mathworksheets4kids.com