

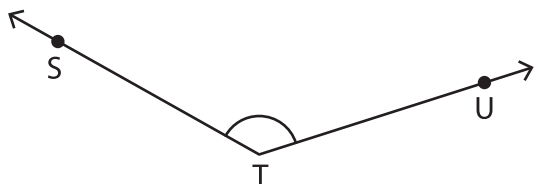
Name : _____

Measuring Angles

Inner & outer scales: S1

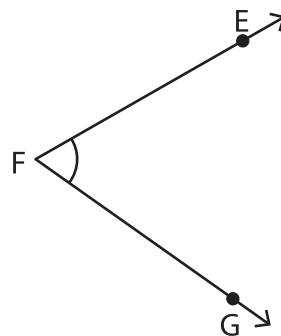
Measure each angle using a protractor.

1)



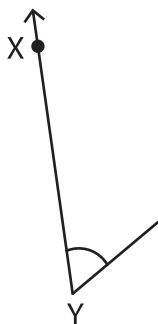
$m\angle STU =$ _____

2)



$m\angle FFG =$ _____

3)



$m\angle XYZ =$ _____


PREVIEW

Gain complete access to the largest collection of worksheets in all subjects!

Members, please log in to download this worksheet.

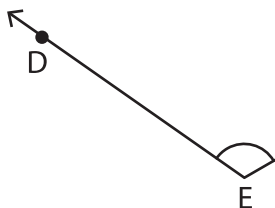
Not a member? Please sign up to gain complete access.

www.mathworksheets4kids.com




$m\angle ABC =$ _____

5)

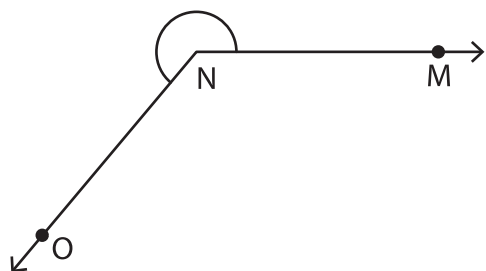


$m\angle DEF =$ _____



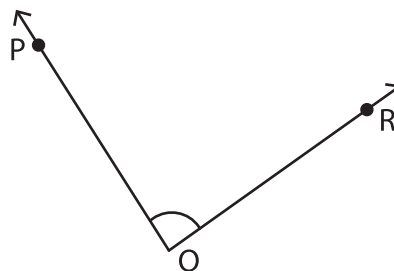
$m\angle ASB =$ _____

7)



$m\angle MNO =$ _____

8)



$m\angle PQR =$ _____