

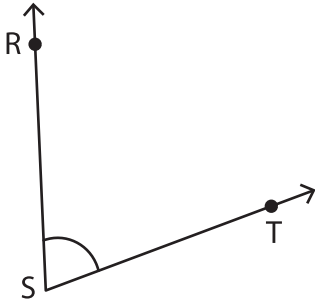
Name : \_\_\_\_\_

# Measuring Angles

Inner & outer scales: S2

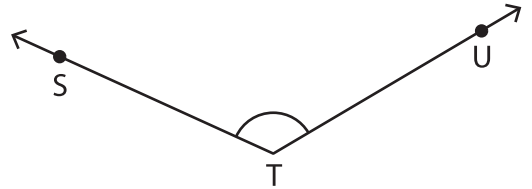
Measure each angle using a protractor.

1)



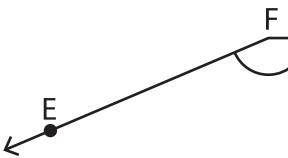
$m\angle RST =$  \_\_\_\_\_

2)



$m\angle STU =$  \_\_\_\_\_

3)



$m\angle EFG =$  \_\_\_\_\_

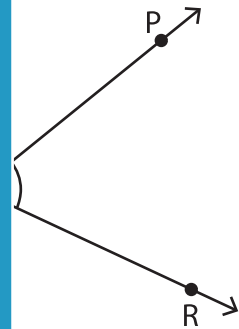
# PREVIEW

Gain complete access to the largest collection of worksheets in all subjects!

Members, please log in to download this worksheet.

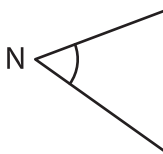
Not a member? Please sign up to gain complete access.

[www.mathworksheets4kids.com](http://www.mathworksheets4kids.com)

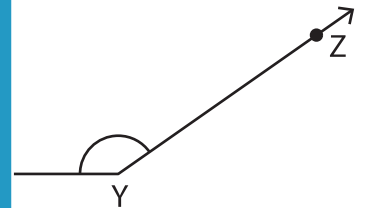


$m\angle PGR =$  \_\_\_\_\_

5)

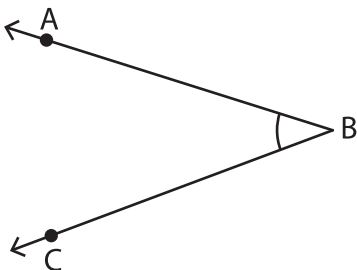


$m\angle MNO =$  \_\_\_\_\_



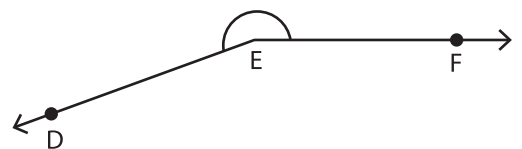
$m\angle ZYW =$  \_\_\_\_\_

7)



$m\angle ABC =$  \_\_\_\_\_

8)



$m\angle DEF =$  \_\_\_\_\_