

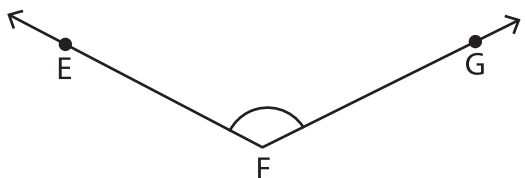
Name : \_\_\_\_\_

# Measuring Angles

Inner & outer scales: S3

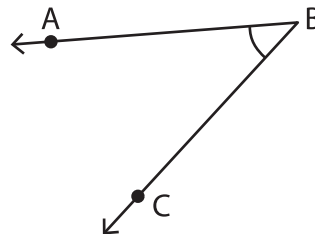
Measure each angle using a protractor.

1)



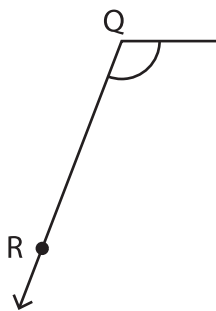
$m\angle EFG =$  \_\_\_\_\_

2)

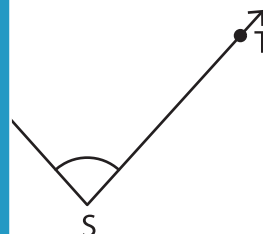


$m\angle ABC =$  \_\_\_\_\_

3)

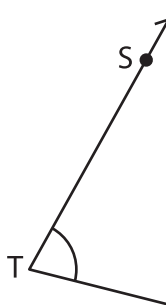


$m\angle PQR =$  \_\_\_\_\_

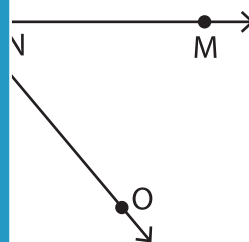


$m\angle T =$  \_\_\_\_\_

5)



$m\angle STU =$  \_\_\_\_\_



$m\angle O =$  \_\_\_\_\_

# PREVIEW

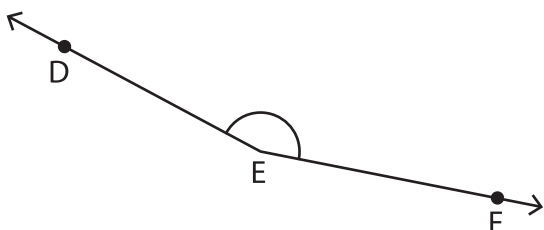
Gain complete access to the largest collection of worksheets in all subjects!

Members, please log in to download this worksheet.

Not a member? Please sign up to gain complete access.

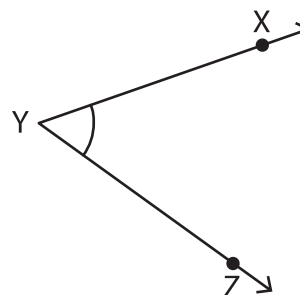
[www.mathworksheets4kids.com](http://www.mathworksheets4kids.com)

7)



$m\angle DEF =$  \_\_\_\_\_

8)



$m\angle XYZ =$  \_\_\_\_\_