

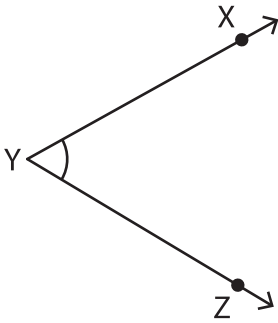
Name : \_\_\_\_\_

# Measuring Angles

Inner & outer scales: 55

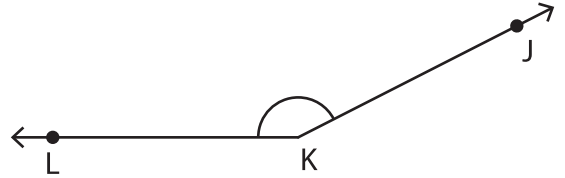
Measure each angle using a protractor.

1)



$m\angle ZYX =$  \_\_\_\_\_

2)



$m\angle JKL =$  \_\_\_\_\_

3)



$m\angle TUV =$  \_\_\_\_\_


# PREVIEW

Gain complete access to the largest collection of worksheets in all subjects!

Members, please log in to download this worksheet.

Not a member? Please sign up to gain complete access.

[www.mathworksheets4kids.com](http://www.mathworksheets4kids.com)



$m\angle UGF =$  \_\_\_\_\_

5)

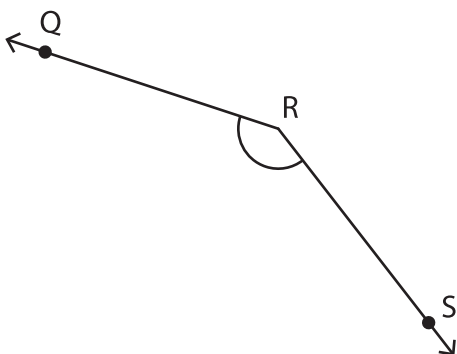


$m\angle WXY =$  \_\_\_\_\_



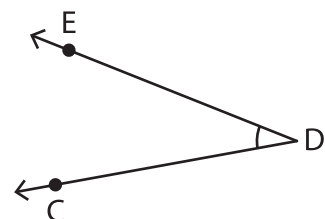
$m\angle BAC =$  \_\_\_\_\_

7)



$m\angle SRQ =$  \_\_\_\_\_

8)



$m\angle EDC =$  \_\_\_\_\_