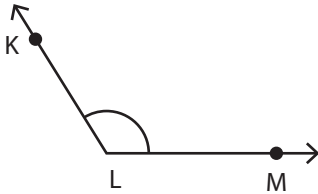


Identifying the Vertex and Arms

Identify the vertex and arms that form each angle.

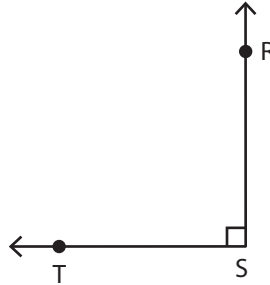
1)



Vertex: _____

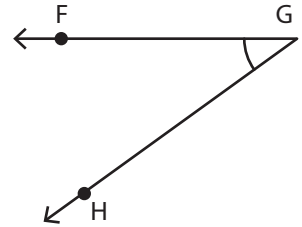
Arms: _____

2)



Vertex: _____

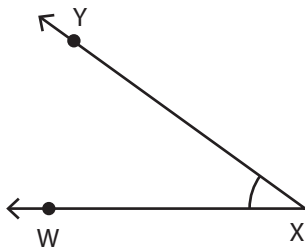
3)



Vertex: _____

Arms: _____

4)



Vertex: _____

Arms: _____

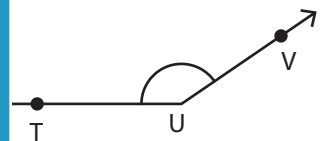
PREVIEW

Gain complete access to the largest collection of worksheets in all subjects!

Members, please log in to download this worksheet.

Not a member? Please sign up to gain complete access.

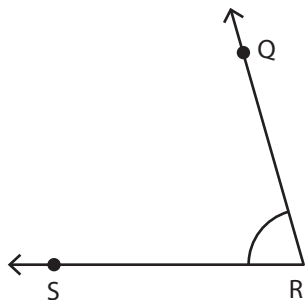
www.mathworksheets4kids.com



Vertex: _____

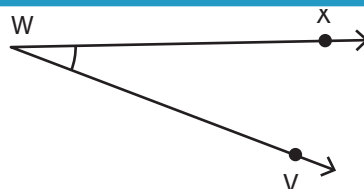
Arms: _____

7)



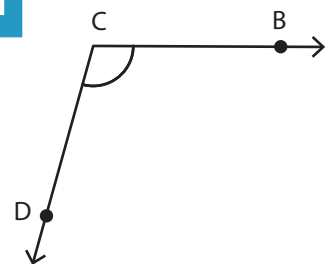
Vertex: _____

Arms: _____



Vertex: _____

Arms: _____



Vertex: _____

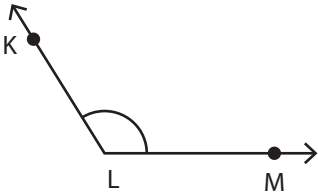
Arms: _____

Name : _____

Identifying the Vertex and Arms

Identify the vertex and arms that form each angle.

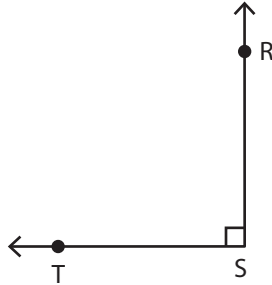
1)



Vertex: **L**

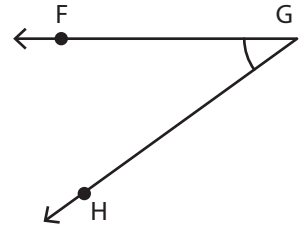
Arms: **\vec{LK}, \vec{LM}**

2)



Vertex: **S**

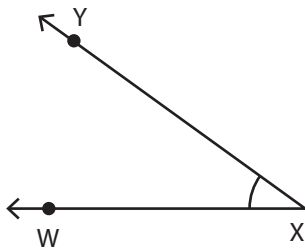
3)



Vertex: **G**

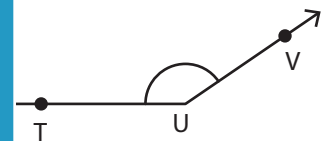
Arms: **\vec{GF}, \vec{GH}**

4)



Vertex: **X**

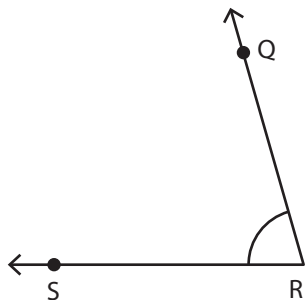
Arms: **\vec{XW}, \vec{XY}**



Vertex: **U**

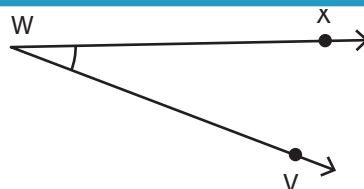
Arms: **\vec{UT}, \vec{UV}**

7)



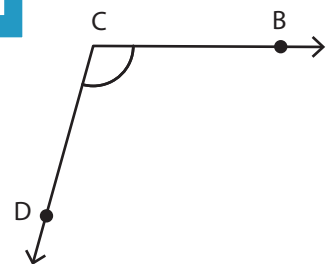
Vertex: **R**

Arms: **\vec{RQ}, \vec{RS}**



Vertex: **W**

Arms: **\vec{WV}, \vec{WX}**



Vertex: **C**

Arms: **\vec{CB}, \vec{CD}**

PREVIEW

Gain complete access to the largest collection of worksheets in all subjects!

Members, please log in to download this worksheet.

Not a member? Please sign up to gain complete access.

www.mathworksheets4kids.com