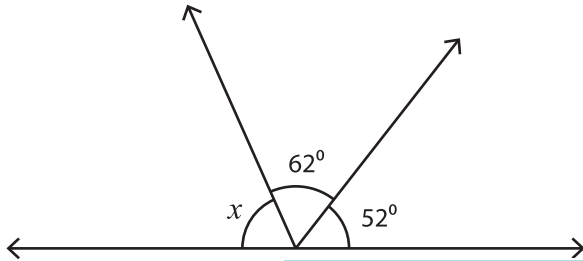


Name : _____

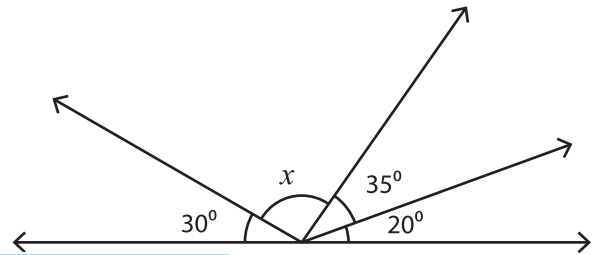
Angles on a Straight Line

Find the size of each missing angle.

1)



2)



$x =$ _____

PREVIEW

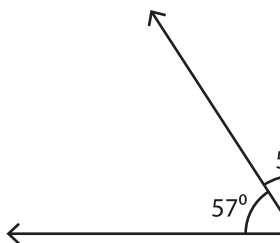
Gain complete access to the largest collection of worksheets in all subjects!

Members, please log in to download this worksheet.

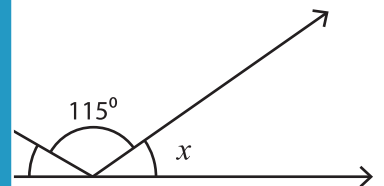
Not a member? Please sign up to gain complete access.

www.mathworksheets4kids.com

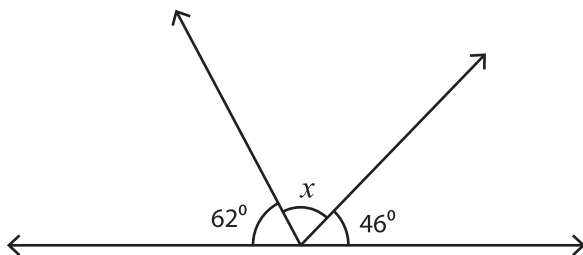
3)



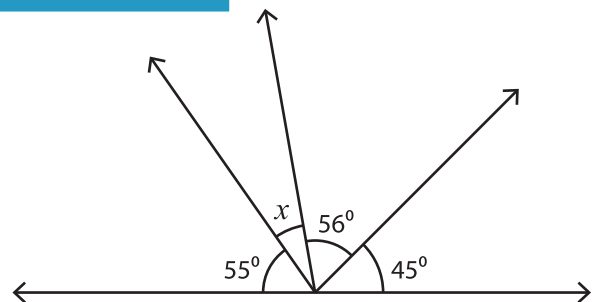
$x =$ _____



5)



$x =$ _____



$x =$ _____