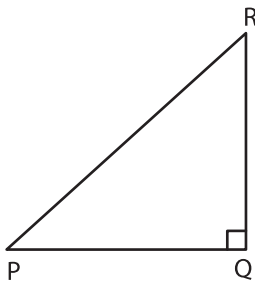


Types of Angles - Shapes

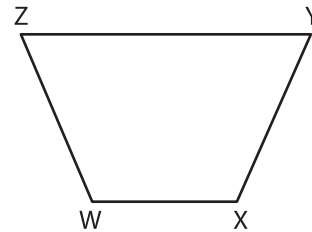
Identify the type of each indicated angle.

1)



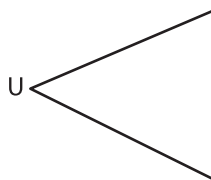
$\angle PQR$: _____

2)



$\angle ZYX$: _____

3)



$\angle TUV$: _____

PREVIEW

Gain complete access to the largest collection of worksheets in all subjects!

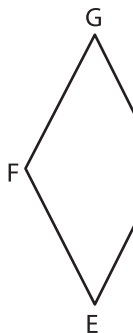
Members, please log in to download this worksheet.

Not a member? Please sign up to gain complete access.

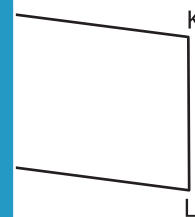
www.mathworksheets4kids.com




5)



$\angle EHG$: _____

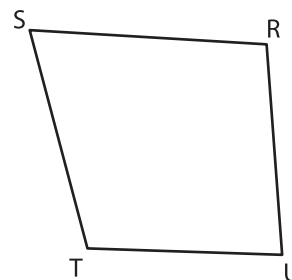


7)



$\angle BCD$: _____

8)



$\angle UTS$: _____