




Name : \_\_\_\_\_

## Bar Graph - Donations

Sheet 3

Students of Harvard Elementary School made donations to a charity. Mrs. Anne gathered data on the number of bills donated. Draw a graph to represent the data and answer the questions.

\$ 5	\$ 10	\$ 20	\$ 50	\$ 100
				
36	16	12	32	24



- 1) How many fifty-dollar bills were donated to the organization? \_\_\_\_\_
- 2) Which bill was the fewest of all? \_\_\_\_\_
- 3) How many more five-dollar bills were donated than hundred-dollar bills? \_\_\_\_\_
- 4) Which bill was donated by the greatest number of students? \_\_\_\_\_