

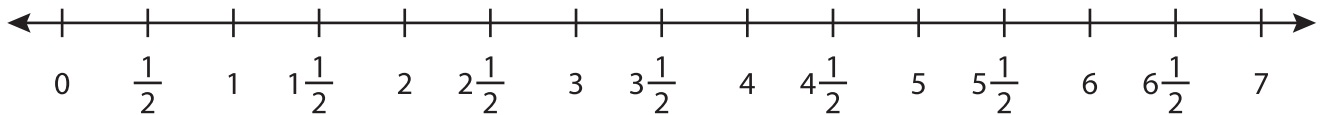
Name : _____

Addition using Number Line

3addends: T1S3

Indicate hops on each number line and complete the addition sentences.

1) $\frac{1}{2} + 2\frac{1}{2} + 2\frac{1}{2} =$ _____



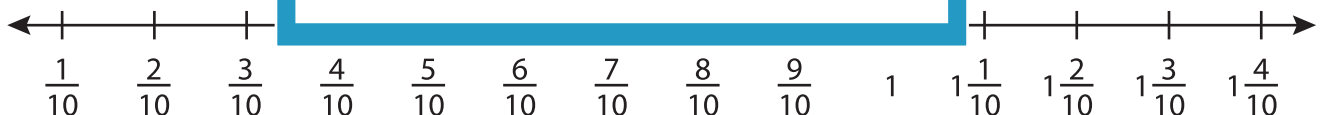
2) $\frac{1}{6} + \frac{2}{6}$



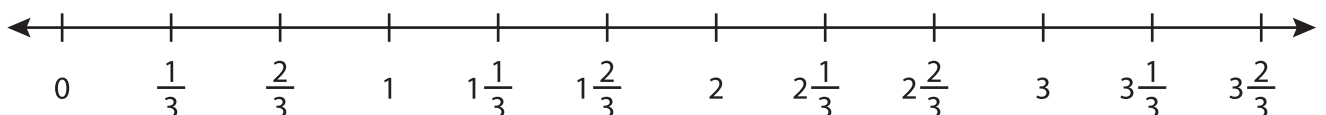
3) $\frac{2}{7} + 1\frac{1}{7}$



4) $\frac{1}{10} + \frac{6}{10}$



5) $\frac{1}{3} + 1\frac{1}{3} + \frac{1}{3} =$ _____



PREVIEW

Gain complete access to the largest collection of worksheets in all subjects!

Members, please log in to download this worksheet.

Not a member? Please sign up to gain complete access.

www.mathworksheets4kids.com