



Name : \_\_\_\_\_

# Comparing Decimals - Blocks

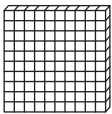
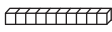
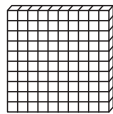
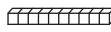
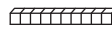
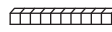
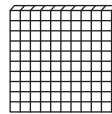
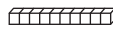
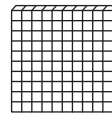

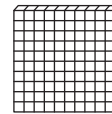
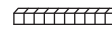
Sheet 1

 - hundredth

 - tenth

 - ones

Compare each pair of decimals using blocks.

1)            

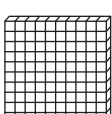
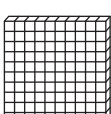









\_\_\_\_\_

2)     



















\_\_\_\_\_

3)       

\_\_\_\_\_

4)           

\_\_\_\_\_

5)                  

\_\_\_\_\_

**PREVIEW**

Gain complete access to the largest collection of worksheets in all subjects!

Members, please log in to download this worksheet.

Not a member? Please sign up to gain complete access.

[www.mathworksheets4kids.com](http://www.mathworksheets4kids.com)