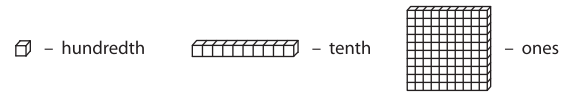



Name : _____

Comparing Decimals - Blocks

Sheet 2



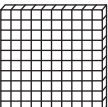
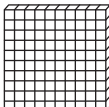
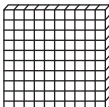
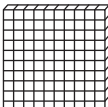






Compare each pair of decimals using blocks.

1)  
 

2)  
 

3) 
 

4) 
 

5)    
     

PREVIEW

Gain complete access to the largest collection of worksheets in all subjects!

Members, please log in to download this worksheet.

Not a member? Please sign up to gain complete access.

www.mathworksheets4kids.com