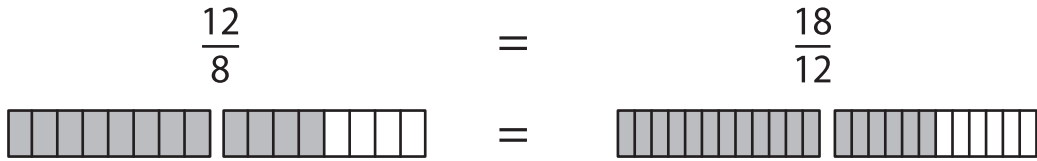


Name : _____

Equivalent Fractions

Example:



Shade the fraction bars for the given equivalent fractions.

1) $\frac{12}{5} = \frac{24}{10}$



2) $\frac{1}{6} = \frac{34}{12}$



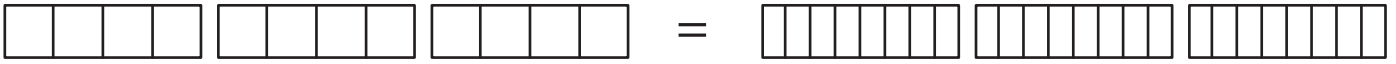
3) $\frac{3}{2} = \frac{9}{6}$



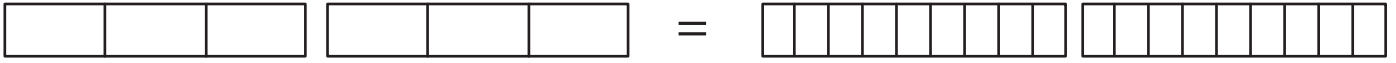
4) $\frac{1}{7} = \frac{30}{14}$



5) $\frac{11}{4} = \frac{22}{8}$



6) $\frac{6}{3} = \frac{18}{9}$



PREVIEW

Gain complete access to the largest collection of worksheets in all subjects!

Members, please log in to download this worksheet.

Not a member? Please sign up to gain complete access.

www.mathworksheets4kids.com