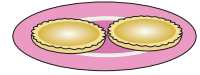


Name : _____

Fraction

T1S1

- 1) Fran baked 12 lemon tarts for her son, Bob. He gobbled up 4 tarts. What fraction of lemon tarts did Bob eat?



- 2) Gina travels a distance of 7 miles to reach home. The bus ride covers 5 miles. She then walks 2 miles to reach her home. What fraction of miles does Gina travel by bus?



- 3) Anne has 24 pencils. She used 18 pencils on them and the 6 are marked #3. What fraction of pencils are marked #3?

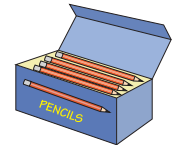
PREVIEW

Gain complete access to the largest collection of worksheets in all subjects!

Members, please log in to download this worksheet.

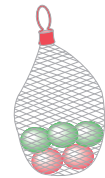
Not a member? Please sign up to gain complete access.

www.mathworksheets4kids.com



- 4) Dylan has a total of 100 marbles. He has 25 red marbles, 30 blue marbles, and 45 green marbles. What fraction of marbles did Dylan have that are not red, blue, or green?

- 5) Emily places 15 roses in a vase. She has 6 yellow roses and 9 red roses. What fraction of roses are yellow?



- 6) John owns a total of 10 pairs of socks. He has 3 pairs of black socks and the rest are blue. What fraction of pairs of socks are blue?



- 7) Zoe spotted a total of 39 parrots in an aviary at the San Diego Zoo. She counted 18 macaws and 21 cockatoos. What fraction of macaws did Zoe spot at the aviary?

