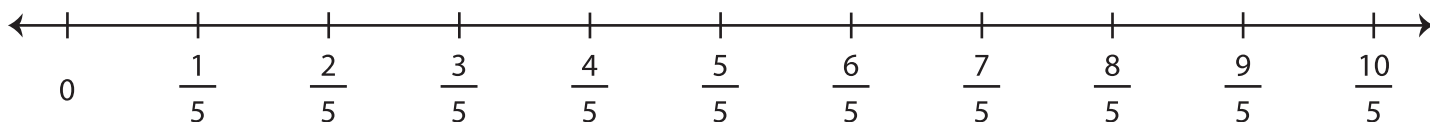


## Multiplying Fractions - Number Line

Draw hops on the number line and complete each multiplication equation.

1)  $2 \times \frac{3}{5} =$  \_\_\_\_\_



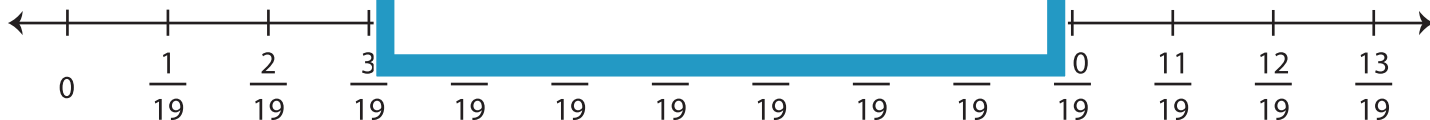
2)  $4 \times \frac{4}{3} =$  \_\_\_\_\_



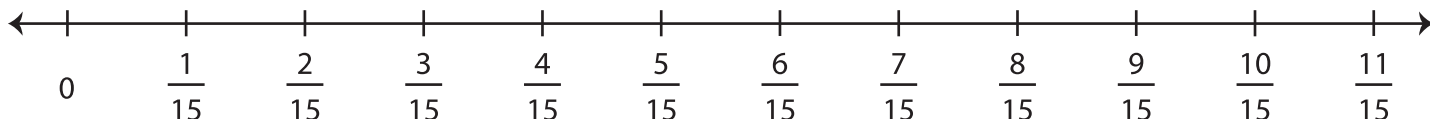
3)  $6 \times \frac{3}{10} =$  \_\_\_\_\_



4)  $5 \times \frac{2}{19} =$  \_\_\_\_\_



5)  $7 \times \frac{1}{15} =$  \_\_\_\_\_



# PREVIEW

Gain complete access to the largest  
collection of worksheets in all subjects!

Members, please  
log in to  
download this  
worksheet.

Not a member?  
Please sign up to  
gain complete  
access.

[www.mathworksheets4kids.com](http://www.mathworksheets4kids.com)