




Name : \_\_\_\_\_

# Line, Line segment & Ray

Description	Model	Symbol
A <b>line</b> is a set of points in a straight path that extends in opposite directions without end.		$\overleftrightarrow{AB}$ or $\overleftrightarrow{BA}$
A <b>line segment</b> is a part of a line bounded by two endpoints.		$\overline{XY}$ or $\overline{YX}$
A <b>ray</b> is a line with a starting point and extending to infinity.		$\overrightarrow{PQ}$

**PREVIEW**

Gain complete access to the largest collection of worksheets in all subjects!

Members, please log in to download this worksheet.

Not a member? Please sign up to gain complete access.

[www.mathworksheets4kids.com](http://www.mathworksheets4kids.com)