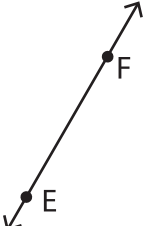
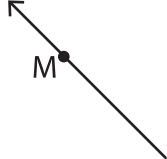



Lines, Rays or Line segments: MCQ


Identify the model as a line, ray or line segment.

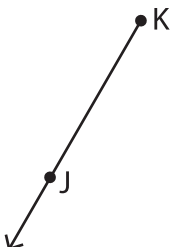
1)  a) line segment EF b) line FE
 c) ray EF d) none of the above

2)  a) ray NM b) ray MN
 d) none of the above

3)  a) ray PC b) ray PQ
 d) none of the above

4)  a) ray UV b) line segment UV
 d) none of the above

5)  a) ray XY b) line YX
 d) none of the above

6)  a) ray KJ b) line KJ
 c) line segment KJ d) none of the above

PREVIEW

Gain complete access to the largest collection of worksheets in all subjects!

Members, please log in to download this worksheet.

Not a member? Please sign up to gain complete access.

www.mathworksheets4kids.com