



**Lines, Rays or Line segments: MCQ**


Identify the model as a line, ray or line segment.


- 1)  a) line segment AB      b) line AB  
 c) ray AB      d) none of the above

- 2)  a) line segment UV      b) line UV  
 d) none of the above

- 3)  b) ray KJ  
 d) none of the above

- 4)  b) ray PQ  
 d) none of the above

- 5)  b) line segment MN  
 c) line MN      d) none of the above

- 6)  a) line segment XY      b) line XY  
 c) ray XY      d) none of the above

**PREVIEW**

Gain complete access to the largest collection of worksheets in all subjects!

Members, please log in to download this worksheet.

Not a member? Please sign up to gain complete access.

[www.mathworksheets4kids.com](http://www.mathworksheets4kids.com)