





**Lines, Rays or Line segments: MCQ**


1) Which one of the following is a line?


- a)       b)       c)       d) 

2) Which one of the following is a ray?


- a)       b)       c)       d) 


3) Which one of the following is a line segment?

- a) 

- d) 

4) Which one of the following is a ray?

- a) 




- d) 


5) Which one of the following is a line?

- a) 

- d) 

6) Which one of the following is a ray?

- a)       b)       c) 

- d) 

7) Which one of the following is a line?

- a)       b)       c)       d) 

**PREVIEW**

Gain complete access to the largest collection of worksheets in all subjects!

Members, please log in to download this worksheet.

Not a member? Please sign up to gain complete access.

[www.mathworksheets4kids.com](http://www.mathworksheets4kids.com)