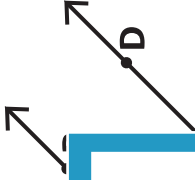

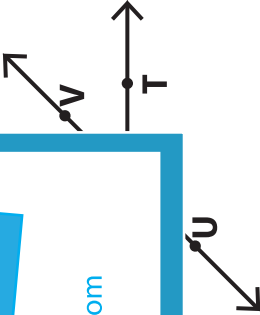


Name : _____

Parallel, Perpendicular and Intersecting Lines

	Description	Figure	Symbol
Parallel Lines	Two lines are always the same distance apart and never meet.		$\overleftrightarrow{AB} \parallel \overleftrightarrow{CD}$
Perpendicular Lines	Two lines intersect to form a right angle.		$\overleftrightarrow{PQ} \perp \overleftrightarrow{MN}$
Intersecting Lines	Two lines cross each other at a single point.		\overleftrightarrow{ST} intersect \overleftrightarrow{UV}

PREVIEW

Gain complete access to the largest collection of worksheets in all subjects!

Members, please log in to download this worksheet.

Not a member? Please sign up to gain complete access.

www.mathworksheets4kids.com