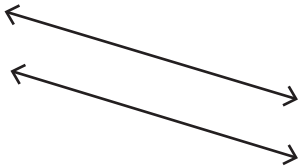


**Multiple Choice**

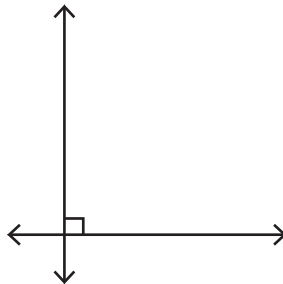
Identify each pair of lines as parallel, perpendicular or intersecting.

1)



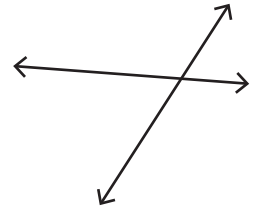
- a) intersecting lines
- b) parallel lines
- c) perpendicular lines

2)



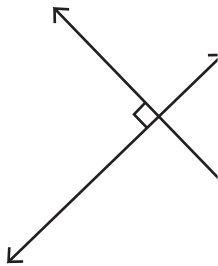
- a) intersecting lines

3)




- a) intersecting lines
- b) parallel lines
- c) perpendicular lines

4)



- a) intersecting lines
- b) parallel lines
- c) perpendicular lines

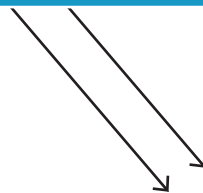


- a) intersecting lines
- b) parallel lines
- c) perpendicular lines

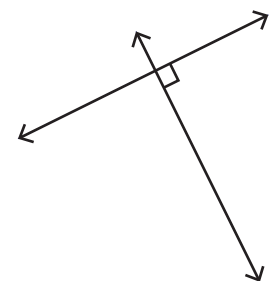
7)



- a) intersecting lines
- b) parallel lines
- c) perpendicular lines



- a) intersecting lines
- b) parallel lines
- c) perpendicular lines



- a) intersecting lines
- b) parallel lines
- c) perpendicular lines

# PREVIEW

Gain complete access to the largest collection of worksheets in all subjects!

Members, please log in to download this worksheet.

Not a member? Please sign up to gain complete access.

www.mathworksheets4kids.com