

Name : \_\_\_\_\_

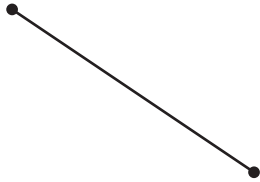
# Points, Lines, Rays & Line segments

Sheet 1

## Part - A


Write each as a point, line, ray or line segment.

1)



\_\_\_\_\_

2)




\_\_\_\_\_

3)



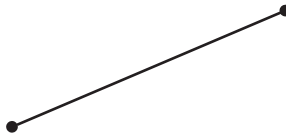
\_\_\_\_\_

4)



\_\_\_\_\_

5)



\_\_\_\_\_

6)



\_\_\_\_\_

## Part - B

Draw the following.

1) A line

2) A ray

3) A line segment

Name : \_\_\_\_\_

**Answer key**

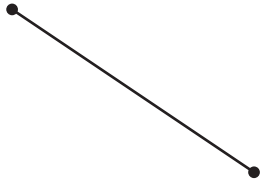
**Points, Lines, Rays & Line segments**

Sheet 1

**Part - A**


Write each as a point, line, ray or line segment.

1)



**line segment**

2)




**line**

3)



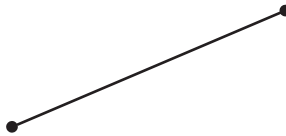
**point**

4)



**ray**

5)



**line segment**

6)



**line**


**Part - B**

Draw the following.

1) A line



2) A ray



3) A line segment

