

Name : _____

Points, Lines, Rays & Line segments

Sheet 5

Part - A

Write each as a point, line, ray or line segment.

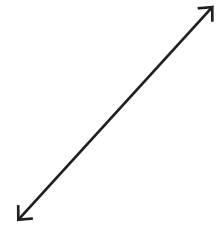
1)



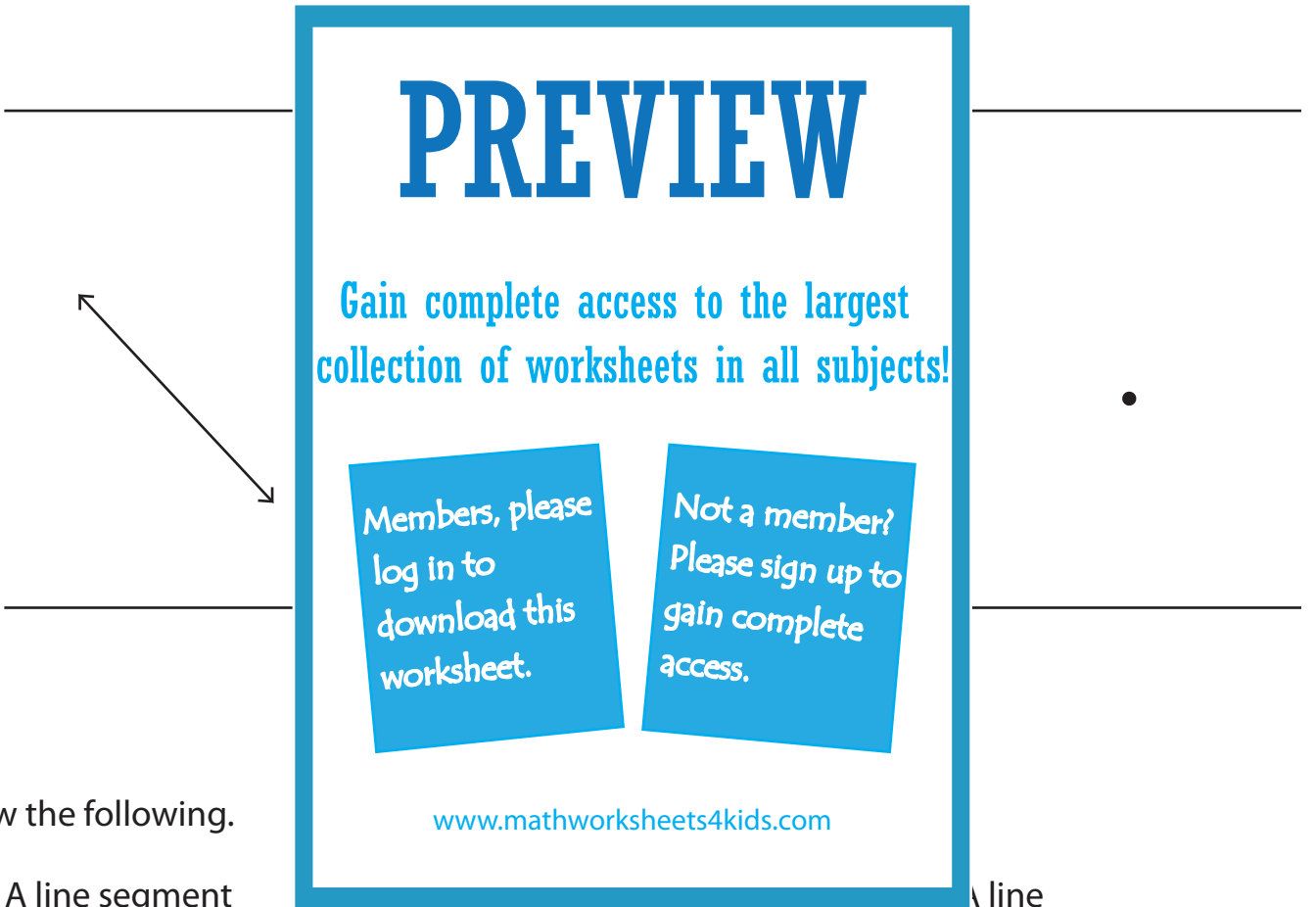
2)



3)



4)



Draw the following.

1) A line segment

A line

Name : _____

Answer key

Points, Lines, Rays & Line segments

Sheet 5

Part - A

Write each as a point, line, ray or line segment.

1)



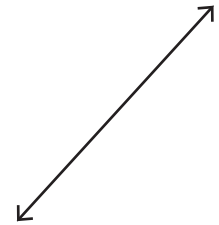
ray

2)

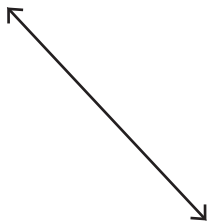


line

3)



4)



line

PREVIEW

Gain complete access to the largest collection of worksheets in all subjects!

Members, please log in to download this worksheet.

Not a member? Please sign up to gain complete access.

www.mathworksheets4kids.com

point

Draw the following.

1) A line segment

