

Name : _____

L2S1

Sum Up the Money!

1) $\$17.36$
 $+ \$53.05$

2) $\$65.72$
 $+ \$80.21$

3) $\$31.89$
 $+ \$28.93$

4) $\$44.00$
 $+ \$79.19$

5) $\$69.81 + \$93.46 =$ _____


6) $\$41.02 + \$25.11 =$ _____



7) $\$32.68 + \55.97

$.50 =$ _____

9)  +  = _____

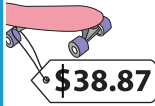
Gain complete access to the largest collection of worksheets in all subjects!

 = _____

11)  +  = _____

Members, please log in to download this worksheet.

Not a member? Please sign up to gain complete access.

 = _____

13) Jason buys new pair of shoes and a pair of shorts. The shoes cost him \$24.99 and the shorts cost him \$19.99. How much did he pay in total?

www.mathworksheets4kids.com

Jason also bought a pair of sneakers for \$24.99 for his daily workout. If the two items in total did Jason spend?

14) Keven bought a tape measure and a dozen pencils for \$19.08 and \$14.87 respectively. How much did he pay the cashier of the tool store in total?
