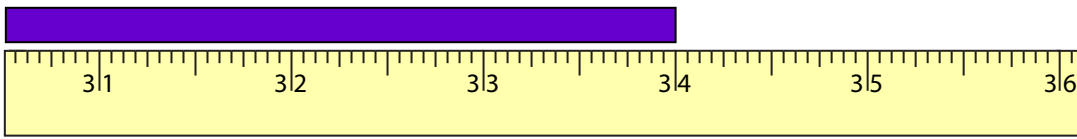


Name : _____

U.S. Customary Unit Conversion

Example:



_____ **2** _____ feet _____ **10** _____ inches

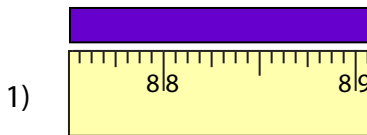
Length = 34 inches

1 foot = 12 inches

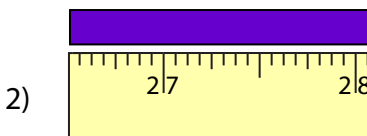
There are 2 feet 10 inches in 34 inches

$$\begin{array}{r} 2 \text{ - feet} \\ 12 \overline{) 34} \\ \underline{24} \\ 10 \text{ - inches} \end{array}$$

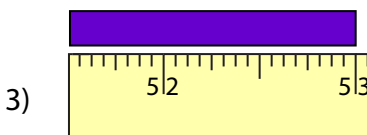
Measure the length of each strip of paper using the ruler. Write your answer in feet and inches.



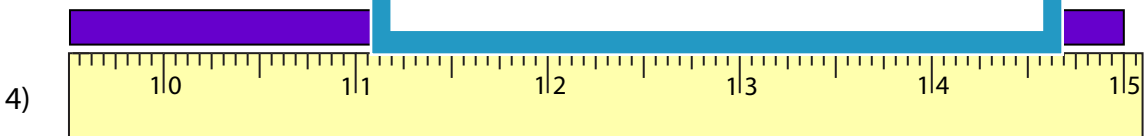
_____ feet _____



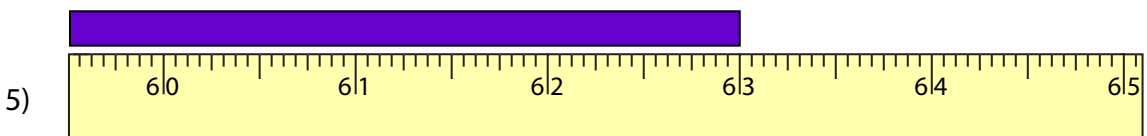
_____ feet _____



_____ feet _____



_____ feet _____ inches



_____ feet _____ inches

PREVIEW

Gain complete access to the largest collection of worksheets in all subjects!

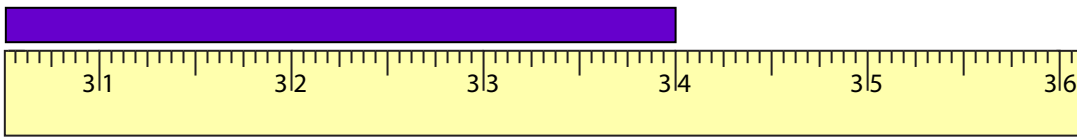
Members, please log in to download this worksheet.

Not a member? Please sign up to gain complete access.

www.mathworksheets4kids.com

U.S. Customary Unit Conversion

Example:



2 feet 10 inches

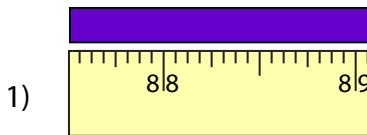
Length = 34 inches

1 foot = 12 inches

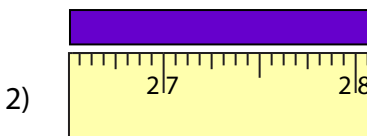
There are 2 feet 10 inches in 34 inches

$$\begin{array}{r} 2 \text{ - feet} \\ 12 \overline{) 34} \\ \underline{24} \\ 10 \text{ - inches} \end{array}$$

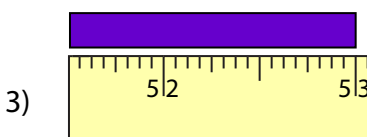
Measure the length of each strip of paper using the ruler. Write your answer in feet and inches.



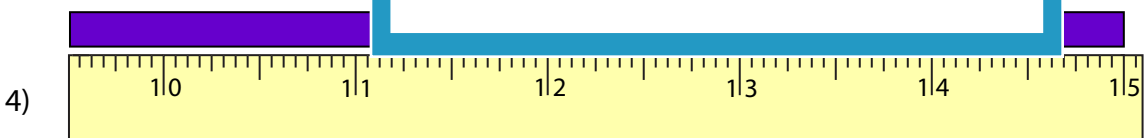
7 feet _____



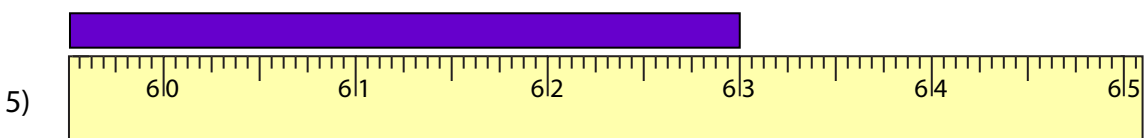
2 feet _____



4 feet _____



1 feet 3 inches



5 feet 3 inches

PREVIEW

Gain complete access to the largest collection of worksheets in all subjects!

Members, please log in to download this worksheet.

Not a member? Please sign up to gain complete access.

www.mathworksheets4kids.com