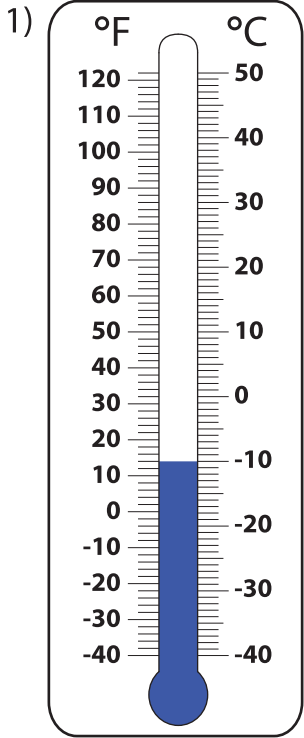
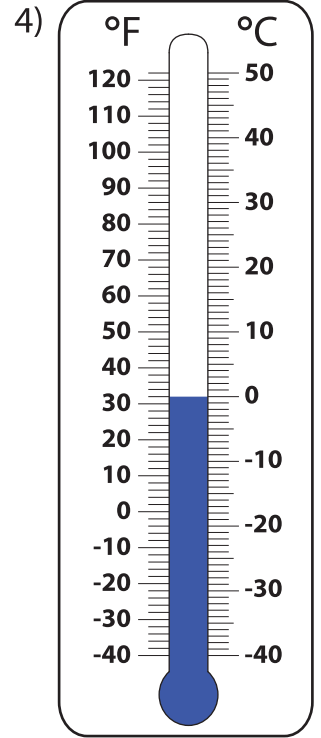
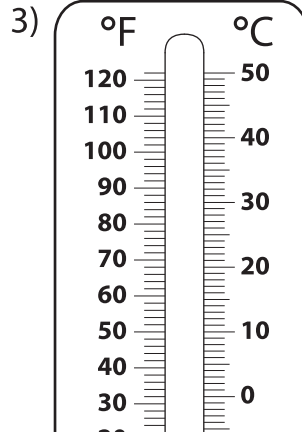
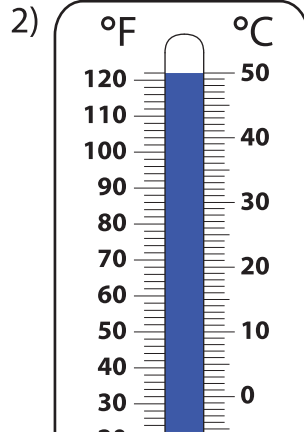


# Reading Thermometers

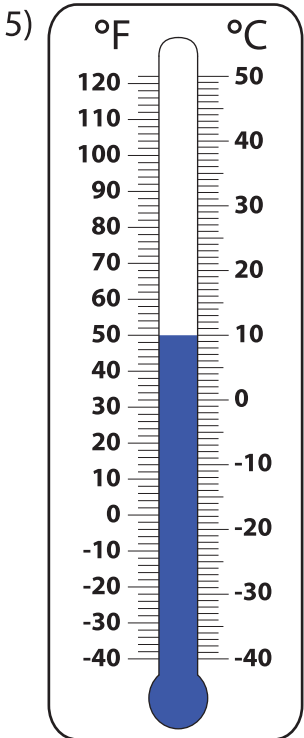
Write the temperature indicated on each thermometer in both scales.



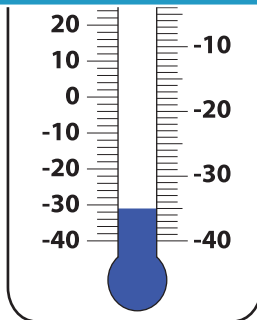
\_\_\_\_\_ °C  
 \_\_\_\_\_ °F



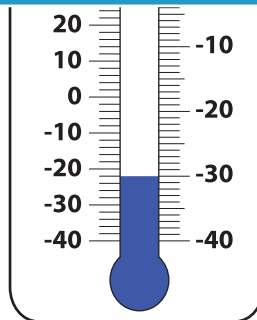
\_\_\_\_\_ °C  
 \_\_\_\_\_ °F



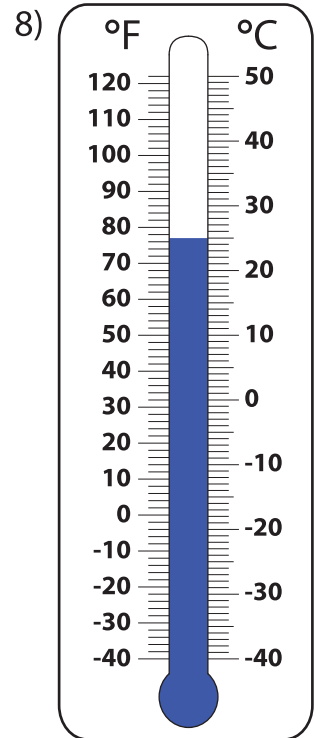
\_\_\_\_\_ °C  
 \_\_\_\_\_ °F



\_\_\_\_\_ °C  
 \_\_\_\_\_ °F



\_\_\_\_\_ °C  
 \_\_\_\_\_ °F



\_\_\_\_\_ °C  
 \_\_\_\_\_ °F

## PREVIEW

Gain complete access to the largest collection of worksheets in all subjects!

Members, please log in to download this worksheet.

Not a member? Please sign up to gain complete access.

[www.mathworksheets4kids.com](http://www.mathworksheets4kids.com)