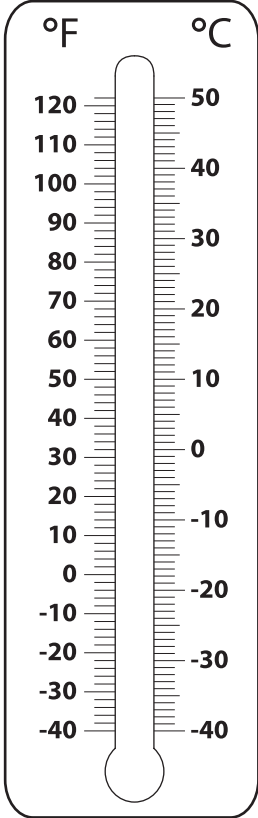


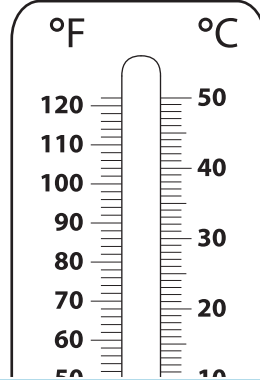
# Shading Thermometers

Shade each thermometer to indicate the specified temperature.

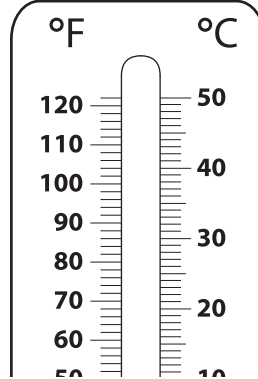
1)  $-4^{\circ}\text{C}$



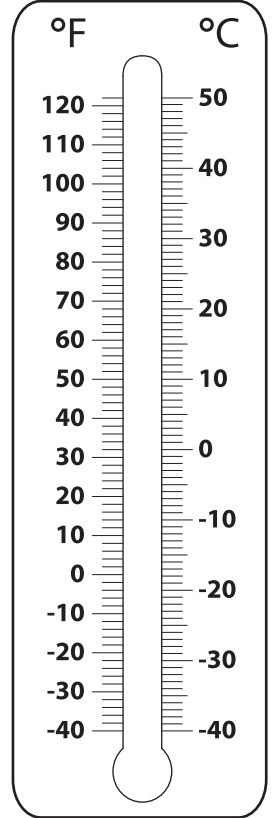
2)  $90^{\circ}\text{F}$



3)  $48^{\circ}\text{C}$



4)  $-15^{\circ}\text{F}$



# PREVIEW

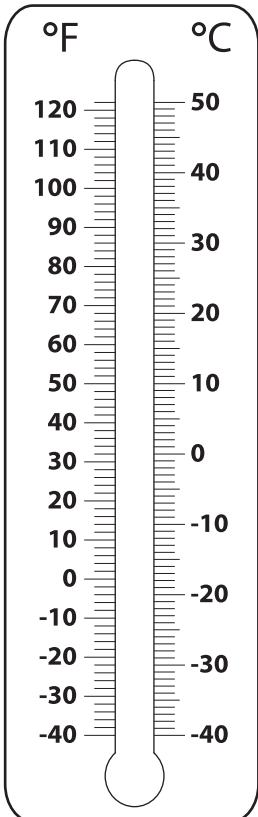
Gain complete access to the largest collection of worksheets in all subjects!

Members, please log in to download this worksheet.

Not a member? Please sign up to gain complete access.

[www.mathworksheets4kids.com](http://www.mathworksheets4kids.com)

5)  $12^{\circ}\text{C}$



8)  $112^{\circ}\text{F}$

