

Measuring Capacity

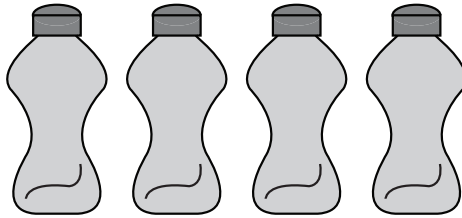
Metric Units: S2

Calculate the capacity.

1)



=

Capacity of each  = _____ mL

2)



=


PREVIEW

Gain complete access to the largest
collection of worksheets in all subjects!

Members, please
log in to
download this
worksheet.

Not a member?
Please sign up to
gain complete
access.


www.mathworksheets4kids.com

each  = _____ mL


3)




=

each  = _____ mL

4)



=

each  = _____ L

5)



=

Capacity of each  = _____ mL