


Measuring Capacity

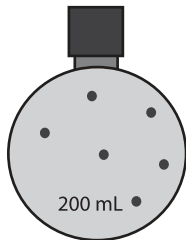
Metric Units: S3

Calculate the capacity.

1)


Capacity of each  = _____ mL

2)




=

PREVIEW

each  = _____ mL

Gain complete access to the largest
collection of worksheets in all subjects!


3)



=

Members, please
log in to
download this
worksheet.

Not a member?
Please sign up to
gain complete
access.


each  = _____ L

www.mathworksheets4kids.com

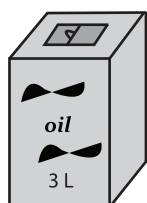
4)



=

each  = _____ mL

5)



=

Capacity of each  = _____ L