


Name : _____


2-Digit Multiplication

Sheet 1

- 1) A Ferris wheel completes a rotation in 53 seconds. How many seconds in all would it take to complete 13 rotations?




- 2) A small dairy farm produces 87 gallons of milk in a day. How many gallons of milk will it produce in 15 days?



- 3) The auditorium has 15 rows of seats. If each row consists of 95 seats, calculate the total number of seats in the auditorium.

Gain complete access to the largest collection of worksheets in all subjects!

consists of 95 seats,



- 4) Clara and her friends spent 12 hours mowing a community lawn over a weekend. How many hours would it take 14 such lawns?

Members, please log in to download this worksheet.

Not a member? Please sign up to gain complete access.

community lawn over a weekend. How many hours would it take 14 such lawns?



- 5) It takes an hour for a car manufacturing company to assemble 11 cars. How many cars can the company assemble in 56 hours?

