

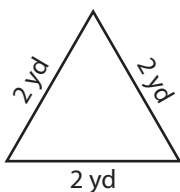
Name : _____

Identifying Triangles

Sides - Numerals: S1

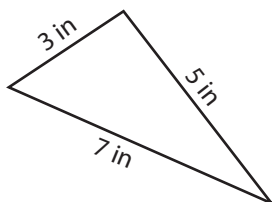
Identify each triangle based on sides. (Equilateral, Isosceles or Scalene)

1)

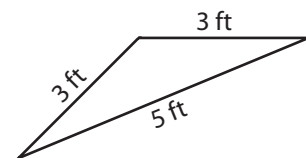


Equilateral triangle

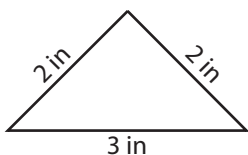
2)



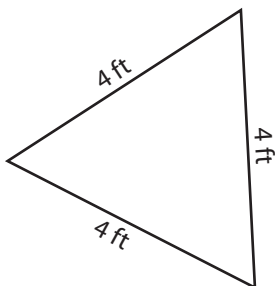
3)



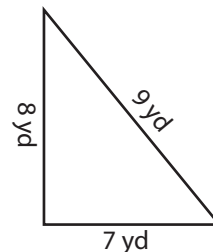
4)



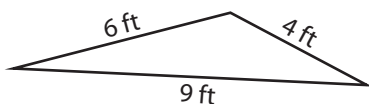
5)



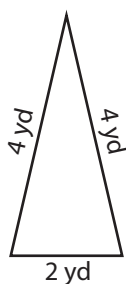
6)



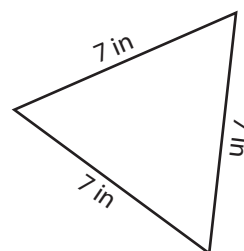
7)



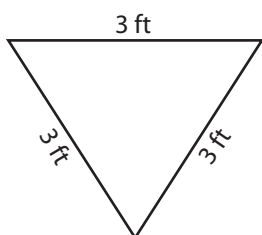
8)



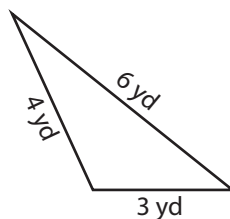
9)



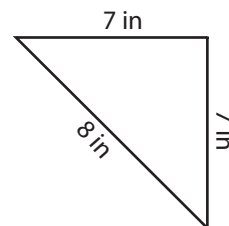
10)



11)



12)



Name : _____

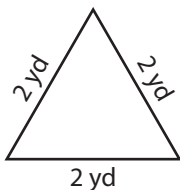
Answer key

Identifying Triangles

Sides - Numerals: S1

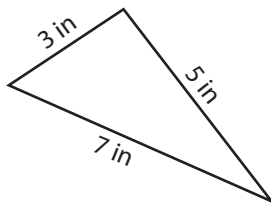
Identify each triangle based on sides. (Equilateral, Isosceles or Scalene)

1)



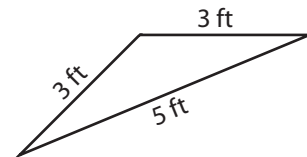
Equilateral triangle

2)



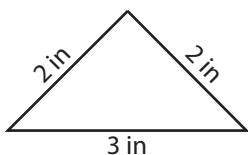
Scalene triangle

3)



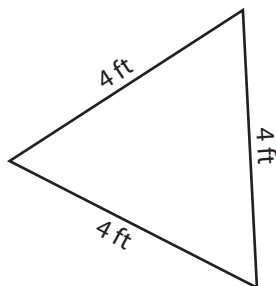
Isosceles triangle

4)



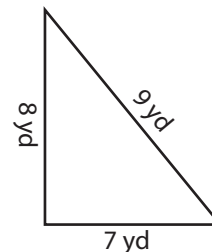
Isosceles triangle

5)



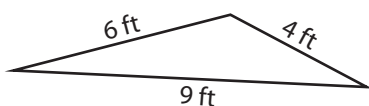
Equilateral triangle

6)



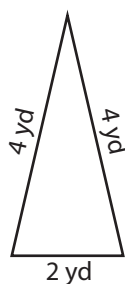
Scalene triangle

7)



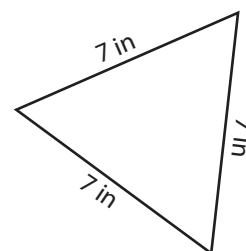
Scalene triangle

8)



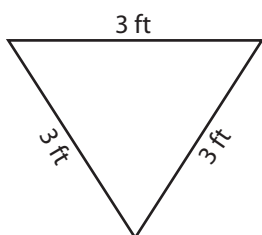
Isosceles triangle

9)



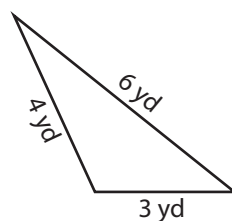
Equilateral triangle

10)



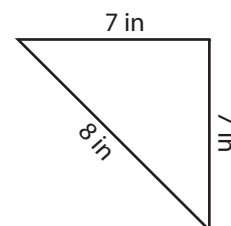
Equilateral triangle

11)



Scalene triangle

12)



Isosceles triangle